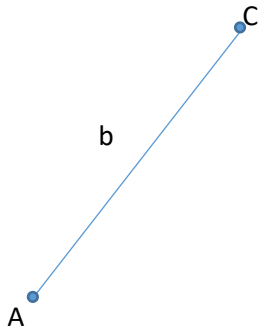


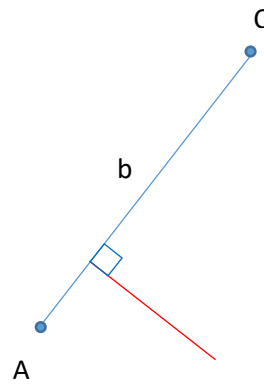
NAVODILO:

1. Narišeš stranico  $b = 4,5$  cm.

2.

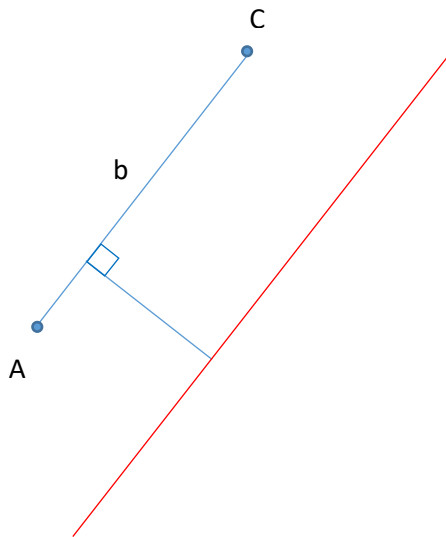


2. Nariši kjerkoli pravokotno višino  $v_b = 2$  cm

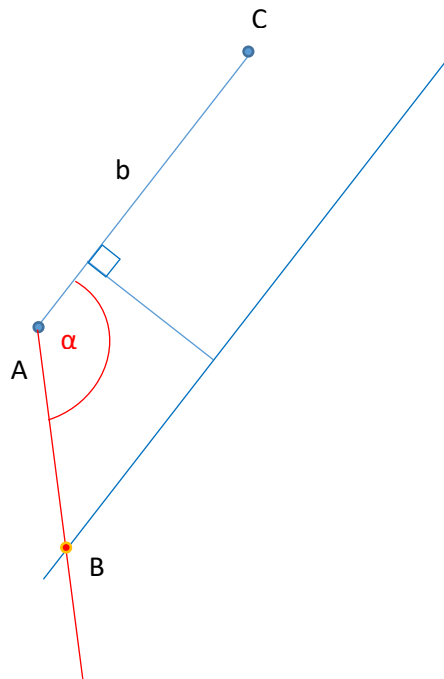


3. Nariši vzporednico s stranico b na višini 2 cm.

4.



4. Odmeri kot  $\alpha = 135^\circ$ , dobiš točko B.



5. poveži še točki B in C in dobiš trikotnik ABC.

